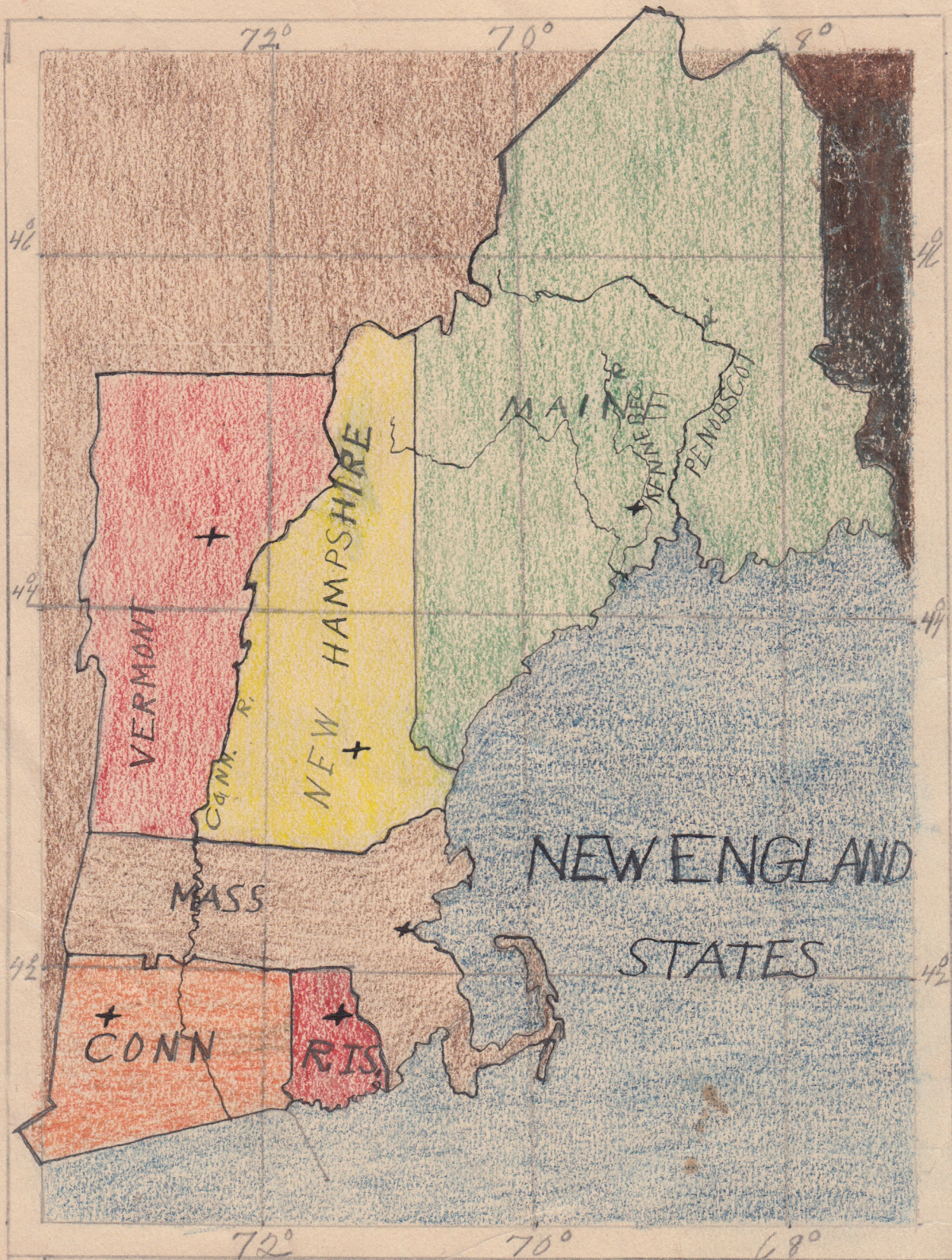
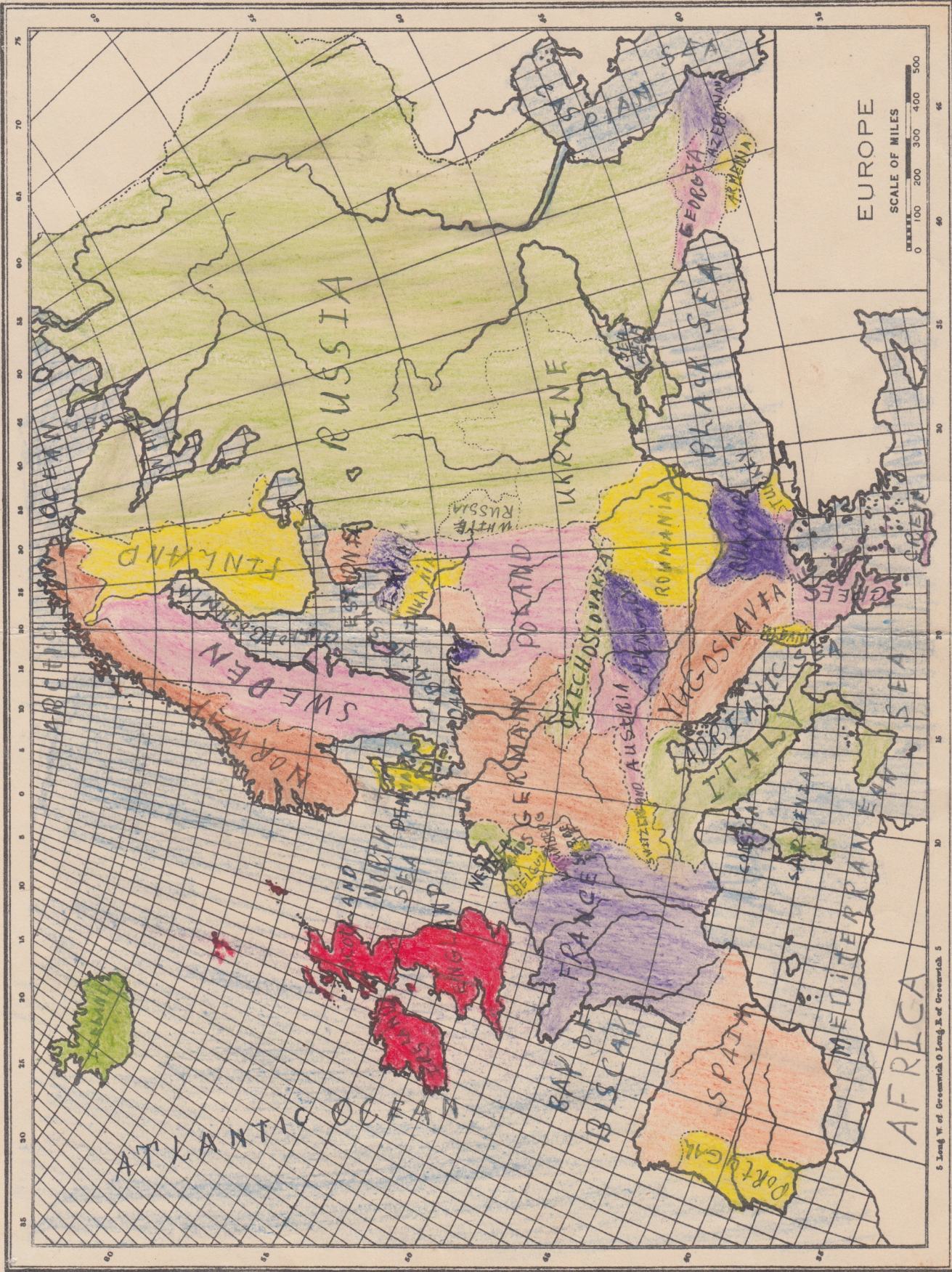


Frederick B. Baker



States	Area Sq mi.	Population 1920	Capital
Virginia	33,040	748,014	Richmond
Hampshire	9,341	443,083	Concord
Mont	9,564	352,428	Montpelier
Massachusetts	8,266	3,852,354	Boston
Rhode Island	1,248	604,397	Providence
Connecticut	4,965	1,380,631	Hartford



EUROPE

SCALE OF MILES



5 Jones W. of Geomorph. O. Long. N. of Geomorph. 5

NO. D 2

COPYRIGHT — A. J. NYSTROM & CO. CHICAGO

carman

TRADE MARK

PROJECT PROBLEM

OUTLINE MAPS NO. 5001


GEOGRAPHICAL SERIES

THE UNITED STATES

BY LEONARD O. PACKARD
Head of Dept. of Geography
Boston Normal School

EXERCISE: PHYSICAL FEATURES AND PRODUCTS.

1 Print names of all the states. Trace with a *blue* pencil all shore lines of the
2 country. Print names of all bodies of water bordering the country. Trace with a
3 *black* pencil all boundaries between states and between the United States and other
4 countries. Print names of countries north and south of the United States. **Problems:**
5 **Why has the United States a larger population than Canada? Why**
6 **has the United States a better location than Canada? Why has Mexico a**
7 **smaller population than the United States? Why has the United States**
8 **a better location than Mexico?**

9 Indicate chief mountain ranges by means of marks . Print names. In
10 what parts of the country are there many cities and towns? In what parts are
11 there few cities and towns? **Problems: Why are there more cities in some**
12 **parts of the country than in other parts? Why should there be more**
13 **railroads in some parts of the country than in others? What industries**
14 **are carried on in those parts where there are many railroads?**

15 With a *black* pencil trace the largest rivers of the United States. Print names.
16 **Problems: Which of these rivers are most useful and why? Which of the**
17 **rivers are least useful and why?**

18 Print names or initial letter of products raised on farms and ranches in the
19 central part of the United States? **Problems: Why are these great crops**
20 **raised in this part of the country? To what great cities in the central part**
21 **of the United States are these products sent? Locate these cities by red dots.**
22 **Print their names. Problem: What are the advantages of the location of**
23 **each city?**

24 Print name of each of the Great Lakes. **Problem: How do the Great Lakes**
25 **help the industries of the Central Plains? What important industries**
26 **have developed along the shores of the Great Lakes? Locate and print**
27 **names of two cities on the Great Lakes.**

28 With a *red* pencil trace route of chief railroad lines from Chicago to Boston;
29 Chicago to New York; Chicago to Philadelphia and Chicago to Baltimore. Locate
30 all those cities with *red* dots. Print their names. **Problems: What is the chief**
31 **business of these four cities on the Atlantic Coast? Why have large cities**
32 **grown up along the Atlantic Coast? Why are there many large cities in**
33 **the northeastern part of the country? In space at end of arrow pointing away**
34 **from New York print names of products which are exported through that city to**
35 **the countries of Europe. In the space at end of arrow pointing toward New York**
36 **print names of products which are imported through that city from the countries**
37 **of Europe.**

38 Locate by *red* dots, Pittsburg, Buffalo, Newark, Springfield, Lowell and Brock-
39 ton. Print names. **Problems: What is the chief industry of each of these**
40 **cities? Why has this part of the United States become an important**
41 **manufacturing region?**

42 Print names of chief products of the Southern States. **Problem: Why are**
43 **these products not raised in the northern part of the United States?**

44 To what cities of the Southern States are the products of this region sent for
45 export? Locate and print names of these cities. Trace the Mississippi River.
46 What large city has grown up near the mouth of the river? **Problems: How has**
47 **the Mississippi River helped this city to grow? What other cities have been**
48 **helped by the same river? Why has Galveston become an important city?**
49 **Locate Galveston with a red dot and print name.**

50 How do products of Florida differ from those of other Southern States? Print
51 names of those products. Locate Birmingham. **Problem: Why has this city**



52 become important? Print chief products of states of the
53 Mountain region. **Problems: Why do these products**
54 **from those of the Central Plains? Why are there few**
55 **and towns in these states? Why are there few railroads**
56 **ing the mountains? Why do many travellers visit the m**
57 **tains?**

58 Locate Denver and print name. **Problem: Why is Denver**
59 **important city? Show by means of horizontal lines the**
60 **regions of the United States. Problems: Why are there**
61 **people living in those regions? *Why are those regions**
62 **Print names of three cities situated on or near the Pacific**
63 **Problems: Why have these cities developed here? What**
64 **ducts do these cities send to other parts of the world?**
65 **names of these products in the states which produce them.**
66 **lem: Why are products of California different from t**
67 **of Oregon and Washington? In space at end of arrow poi**
68 **away from San Francisco print names of products exported th**
69 **that city. In space at end of arrow pointing toward San Fran**
70 **print names of products imported by the Pacific States.**



SOUTH AMERICA

